



**KOLEJ MATRIKULASI KEDAH
KEMENTERIAN PENDIDIKAN MALAYSIA**

QS 025/1

Matriculation Programme Examination

Semester II

Session 2017/2018

- Evaluate $\int_0^{\frac{\pi}{6}} \tan 2\theta \cos^2 2\theta d\theta$.
- Given vectors $\mathbf{p} = 3\mathbf{i} - 6\mathbf{j} + \alpha\mathbf{k}$ and $\mathbf{q} = \beta\mathbf{i} - 4\mathbf{j} + 5\mathbf{k}$ where α and β are constants.
 - Find the values of α and β if \mathbf{p} and \mathbf{q} are parallel.
 - Given $\alpha = 1$, find β if \mathbf{p} and \mathbf{q} are perpendicular.
- Given three points P(-3, 2, -1), Q(-2, 4, 5) and R(1, -2, 4). Calculate the area of triangle PQR.
- Determine the vertices and foci of the ellipse $25x^2 + 4y^2 - 250x - 16y + 541 = 0$. Sketch the ellipse and label the foci, center and vertices.
- Show that the equation $\ln x + x - 4 = 0$ has a root between 1 and 3. From the Newton-Raphson formula, show that iterative equation of the root is $x_{n+1} = \frac{x_n(5 - \ln x_n)}{1 + x_n}$. Hence, if the initial value is $x_1 = 2$, calculate the root correct to three decimal places.
- Show that the line $2y - 5x + 4 = 0$ does not intersect the circle $x^2 + y^2 + 3x - 2y + 2 = 0$. Find centre and radius of the circle. Hence, determine the shortest distance between the line and the circle.
- Given the line $L: \frac{x-1}{2} = \frac{y-3}{-1} = \frac{z-2}{-3}$ and the planes $\pi_1: 2x - y - 2z = 17$ and $\pi_2: -4x - 3y + 5z = 10$.

Find

- The intersection point between L and π_1 .
 - The acute angle between π_1 and π_2 .
 - The parametric equations of the line that passes through the point (2, -1, 3) and perpendicular to the plane π_2 .
- Express $\frac{6x^2 - x + 7}{(4 - 3x)(1 + x)^2}$ in partial fractions. Hence, show that $\int_0^1 \frac{6x^2 - x + 7}{(4 - 3x)(1 + x)^2} = 1 + \ln 2$.
 - Find the general solution of the differential equation $\frac{dy}{dx} = y^2 x e^{-2x}$. Give your answer in the form $y = f(x)$.
 - Find the particular solution of the differential equation $\frac{dy}{dx} + \frac{xy}{1 + x^2} = \sqrt{1 + x^2}$, given that $y = 1$ when $x = 0$.
 - Given the curve $y^2 = x$ and the line $y = -2x + 1$.
 - Determine the points of intersection between the curve and the line.

- b) Sketch the curve and the line on the same axes. Shade the region R bounded by the curve and the line. Label the points of intersection.
- c) Find the area of the region R .
- d) Calculate the volume of the solid generated when the region R is rotated 2π radian about the y -axis.

END OF QUESTION PAPER

KANGKANG

1. Evaluate $\int_0^{\frac{\pi}{6}} \tan 2\theta \cos^2 2\theta \, d\theta$.

SOLUTION

$$\int_0^{\frac{\pi}{6}} \tan 2\theta \cos^2 2\theta \, d\theta = \int_0^{\frac{\pi}{6}} \frac{\sin 2\theta}{\cos 2\theta} \cos^2 2\theta \, d\theta$$

$$= \int_0^{\frac{\pi}{6}} \sin 2\theta \cos 2\theta \, d\theta$$

$$= \int_0^{\frac{\pi}{6}} \frac{1}{2} \sin 2(2\theta) \, d\theta$$

$$= \frac{1}{2} \int_0^{\frac{\pi}{6}} \sin 4\theta \, d\theta$$

$$= -\frac{1}{8} [\cos 4\theta]_0^{\frac{\pi}{6}}$$

$$= -\frac{1}{8} \left\{ \left[\cos 4 \left(\frac{\pi}{6} \right) \right] - [\cos 4(0)] \right\}$$

$$= -\frac{1}{8} \left[\cos \frac{2\pi}{3} - 1 \right]$$

$$= -\frac{1}{8} \left[-\frac{1}{2} - 1 \right]$$

$$= -\frac{1}{8} \left[-\frac{3}{2} \right]$$

$$= \frac{3}{16}$$

$$\sin 2\theta = 2 \sin \theta \cos \theta$$

$$\sin \theta \cos \theta = \frac{1}{2} \sin 2\theta$$

$$\sin 2\theta \cos 2\theta = \frac{1}{2} \sin 2(2\theta)$$

2. Given vectors $\mathbf{p} = 3\mathbf{i} - 6\mathbf{j} + \alpha\mathbf{k}$ and $\mathbf{q} = \beta\mathbf{i} - 4\mathbf{j} + 5\mathbf{k}$ where α and β are constants.
- Find the values of α and β if \mathbf{p} and \mathbf{q} are parallel.
 - Given $\alpha = 1$, find β if \mathbf{p} and \mathbf{q} are perpendicular.

SOLUTION

$$\mathbf{p} = 3\mathbf{i} - 6\mathbf{j} + \alpha\mathbf{k}$$

$$\mathbf{q} = \beta\mathbf{i} - 4\mathbf{j} + 5\mathbf{k}$$

- a) \mathbf{p} and \mathbf{q} are parallel $\rightarrow \mathbf{p} \times \mathbf{q} = \mathbf{0}$.

$$\mathbf{p} \times \mathbf{q} = \mathbf{0}$$

$$\begin{vmatrix} \mathbf{i} & \mathbf{j} & \mathbf{k} \\ 3 & -6 & \alpha \\ \beta & -4 & 5 \end{vmatrix} = \mathbf{0}$$

$$(-30 + 4\alpha)\mathbf{i} - (15 - \alpha\beta)\mathbf{j} + (-12 + 6\beta)\mathbf{k} = 0\mathbf{i} + 0\mathbf{j} + 0\mathbf{k}$$

$$-30 + 4\alpha = 0 \quad \rightarrow \alpha = \frac{30}{4} = \frac{15}{2}$$

$$-12 + 6\beta = 0 \quad \rightarrow \beta = \frac{12}{6} = 2$$

- b) Given $\alpha = 1$. \mathbf{p} and \mathbf{q} are perpendicular $\rightarrow \mathbf{p} \cdot \mathbf{q} = 0$

$$\mathbf{p} \cdot \mathbf{q} = 0$$

$$(3\mathbf{i} - 6\mathbf{j} + \mathbf{k}) \cdot (\beta\mathbf{i} - 4\mathbf{j} + 5\mathbf{k}) = 0$$

$$(3)(\beta) + (-6)(-4) + (1)(5) = 0$$

$$3\beta + 24 + 5 = 0$$

$$3\beta = -29$$

$$\beta = \frac{-29}{3}$$

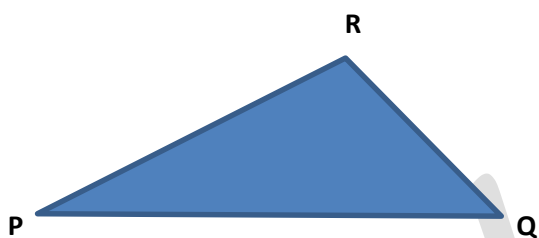
3. Given three points P(-3, 2, -1), Q(-2, 4, 5) and R(1, -2, 4). Calculate the area of triangle PQR.

SOLUTION

$$P(-3, 2, -1) \rightarrow \overrightarrow{OP} = -3\mathbf{i} + 2\mathbf{j} - \mathbf{k}$$

$$Q(-2, 4, 5) \rightarrow \overrightarrow{OQ} = -2\mathbf{i} + 4\mathbf{j} + 5\mathbf{k}$$

$$R(1, -2, 4) \rightarrow \overrightarrow{OR} = \mathbf{i} - 2\mathbf{j} + 4\mathbf{k}$$



$$\text{Area} = \frac{1}{2} |\overrightarrow{PQ} \times \overrightarrow{PR}|$$

$$\begin{aligned} \overrightarrow{PQ} &= \overrightarrow{OQ} - \overrightarrow{OP} \\ &= (-2\mathbf{i} + 4\mathbf{j} + 5\mathbf{k}) - (-3\mathbf{i} + 2\mathbf{j} - \mathbf{k}) \\ &= \mathbf{i} + 2\mathbf{j} + 6\mathbf{k} \end{aligned}$$

$$\begin{aligned} \overrightarrow{PR} &= \overrightarrow{OR} - \overrightarrow{OP} \\ &= (\mathbf{i} - 2\mathbf{j} + 4\mathbf{k}) - (-3\mathbf{i} + 2\mathbf{j} - \mathbf{k}) \\ &= 4\mathbf{i} - 4\mathbf{j} + 5\mathbf{k} \end{aligned}$$

$$\begin{aligned} \overrightarrow{PQ} \times \overrightarrow{PR} &= \begin{vmatrix} \mathbf{i} & \mathbf{j} & \mathbf{k} \\ 1 & 2 & 6 \\ 4 & -4 & 5 \end{vmatrix} \\ &= (10 + 24)\mathbf{i} - (5 - 24)\mathbf{j} + (-4 - 8)\mathbf{k} \end{aligned}$$

$$= 34\mathbf{i} + 19\mathbf{j} - 12\mathbf{k}$$

$$|\overrightarrow{PQ} \times \overrightarrow{PR}| = \sqrt{(34)^2 + (19)^2 + (-12)^2}$$

$$= \sqrt{1661}$$

$$\text{Area} = \frac{1}{2} |\overrightarrow{PQ} \times \overrightarrow{PR}|$$

$$= \frac{1}{2} \sqrt{1661}$$

$$= 20.38 \text{ unit}^2$$

KANGKANG

4. Determine the vertices and foci of the ellipse $25x^2 + 4y^2 - 250x - 16y + 541 = 0$.
Sketch the ellipse and label the foci, center and vertices.

SOLUTION

$$25x^2 + 4y^2 - 250x - 16y + 541 = 0$$

$$25x^2 - 250x + 4y^2 - 16y = -541$$

$$25(x^2 - 10x) + 4(y^2 - 4y) = -541$$

$$25 \left[x^2 - 10x + \left(\frac{-10}{2} \right)^2 - \left(\frac{-10}{2} \right)^2 \right] + 4 \left[y^2 - 4y + \left(\frac{-4}{2} \right)^2 - \left(\frac{-4}{2} \right)^2 \right] = -541$$

$$25[(x - 5)^2 - (-5)^2] + 4[(y - 2)^2 - (-2)^2] = -541$$

$$25[(x - 5)^2 - 25] + 4[(y - 2)^2 - 4] = -541$$

$$25(x - 5)^2 - 625 + 4(y - 2)^2 - 16 = -541$$

$$25(x - 5)^2 + 4(y - 2)^2 = -541 + 625 + 16$$

$$25(x - 5)^2 + 4(y - 2)^2 = 100$$

$$\frac{25(x - 5)^2}{100} + \frac{4(y - 2)^2}{100} = \frac{100}{100}$$

$$\frac{(x - 5)^2}{4} + \frac{(y - 2)^2}{25} = 1$$

$$\frac{(x - h)^2}{a^2} + \frac{(y - k)^2}{b^2} = 1$$

$$h = 5, k = 2, a = 2, b = 5$$

$$c^2 = b^2 - a^2$$

$$= 5^2 - 2^2$$

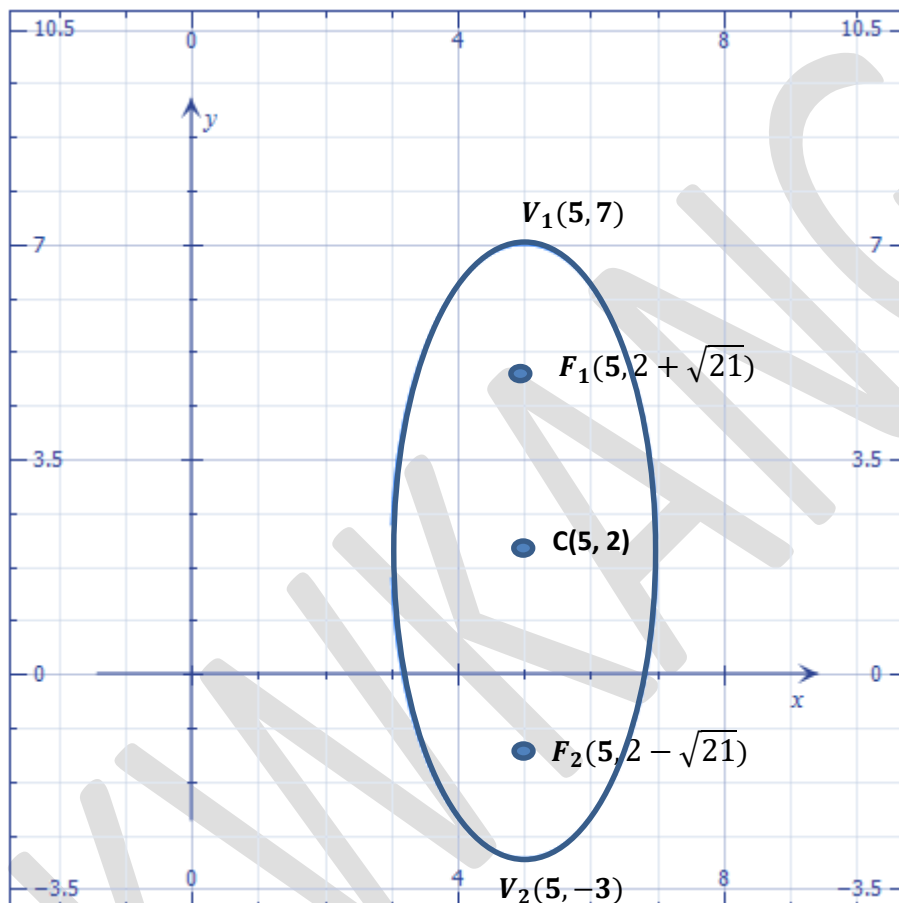
$$= 21$$

$$c = \sqrt{21}$$

Center $(h, k) = (5, 2)$

Vertices, $(h, k \pm b) = (5, 2 \pm 5) = (5, 7)$ and $(5, -3)$

Foci, $(h, k \pm c) = (5, 2 \pm \sqrt{21}) = (5, 2 + \sqrt{21})$ and $(5, 2 - \sqrt{21})$



5. Show that the equation $\ln x + x - 4 = 0$ has a root between 1 and 3. From the Newton-Raphson formula, show that iterative equation of the root is $x_{n+1} = \frac{x_n(5 - \ln x_n)}{1 + x_n}$. Hence, if the initial value is $x_1 = 2$, calculate the root correct to three decimal places.

SOLUTION

$$\ln x + x - 4 = 0$$

Let

$$f(x) = \ln x + x - 4$$

$$f(1) = \ln(1) + (1) - 4 = -3 < 0$$

$$f(3) = \ln(3) + (3) - 4 = 0.099 > 0$$

Since $f(1) < 0$ and $f(3) > 0$, therefore $\ln x + x - 4 = 0$ has root between 1 and 3.

$$f(x) = \ln x + x - 4$$

$$f'(x) = \frac{1}{x} + 1$$

$$= \frac{1 + x}{x}$$

$$x_{n+1} = x_n - \frac{f(x_n)}{f'(x_n)}$$

$$= x_n - \frac{\ln x_n + x_n - 4}{\frac{1 + x_n}{x_n}}$$

$$= x_n - \frac{x_n(\ln x_n + x_n - 4)}{1 + x_n}$$

$$= \frac{x_n(1 + x_n) - x_n(\ln x_n + x_n - 4)}{1 + x_n}$$

$$= \frac{x_n[1 + x_n - (\ln x_n + x_n - 4)]}{1 + x_n}$$

$$= \frac{x_n[1 + x_n - \ln x_n - x_n + 4]}{1 + x_n}$$

$$= \frac{x_n[5 - \ln x_n]}{1 + x_n}$$

$$x_1 = 2$$

$$x_2 = \frac{2[5 - \ln 2]}{1 + 2} = 2.8712$$

$$x_3 = \frac{2.8712[5 - \ln 2.8712]}{1 + 2.8712} = 2.9261$$

$$x_4 = \frac{2.9261[5 - \ln 2.9261]}{1 + 2.9261} = 2.9263$$

$$\therefore x = 2.926$$

6. Show that the line $2y - 5x + 4 = 0$ does not intersect the circle $x^2 + y^2 + 3x - 2y + 2 = 0$. Find centre and radius of the circle. Hence, determine the shortest distance between the line and the circle.

SOLUTION

$$2y - 5x + 4 = 0$$

$$y = \frac{5x-4}{2} \quad \dots\dots\dots (1)$$

$$x^2 + y^2 + 3x - 2y + 2 = 0 \quad \dots\dots\dots (2)$$

Substitute (1) into (2)

$$x^2 + \left(\frac{5x-4}{2}\right)^2 + 3x - 2\left(\frac{5x-4}{2}\right) + 2 = 0$$

$$x^2 + \frac{25x^2 - 40x + 16}{4} + 3x - (5x - 4) + 2 = 0$$

$$4x^2 + 25x^2 - 40x + 16 + 12x - 20x + 16 + 8 = 0$$

$$29x^2 - 48x + 40 = 0$$

$$b^2 - 4ac = 48^2 - 4(29)(40)$$

$$= -2336 < 0$$

Since $b^2 - 4ac < 0$,

therefore $2y - 5x + 4 = 0$ does not intersect the circle $x^2 + y^2 + 3x - 2y + 2 = 0$

$$x^2 + y^2 + 3x - 2y + 2 = 0$$

$$x^2 + y^2 + 2gx + 2fy + c = 0$$

$$2g = 3$$

$$2f = -2$$

$$c = 2$$

$$g = \frac{3}{2}$$

$$f = -1$$

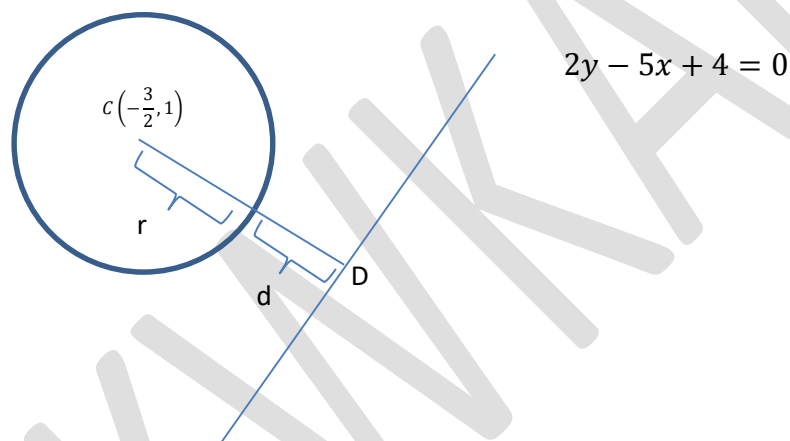
$$\text{Centre of circle: } (-g, -f) = \left(-\frac{3}{2}, 1\right)$$

$$\text{radius: } r = \sqrt{g^2 + f^2 - c}$$

$$= \sqrt{\left(\frac{3}{2}\right)^2 + (-1)^2 - 2}$$

$$= \sqrt{\frac{5}{4}}$$

$$= \frac{\sqrt{5}}{2}$$



$$d = CD - r$$

$$CD = \frac{|ah + bk + c|}{\sqrt{(a)^2 + (b)^2}}$$

$$= \frac{\left|(-5)\left(-\frac{3}{2}\right) + (2)(1) + (4)\right|}{\sqrt{(2)^2 + (-5)^2}}$$

$$= \frac{\left|\frac{27}{2}\right|}{\sqrt{4 + 25}}$$

$$= \frac{27}{2\sqrt{29}}$$

$$d = CD - r$$

$$= \frac{27}{2\sqrt{29}} - \frac{\sqrt{5}}{2}$$

$$= 1.39$$

KANGKANG

7. Given the line $L: \frac{x-1}{2} = \frac{y-3}{-1} = \frac{z-2}{-3}$ and the planes $\pi_1: 2x - y - 2z = 17$ and $\pi_2: -4x - 3y + 5z = 10$.

Find

- The intersection point between L and π_1 .
- The acute angle between π_1 and π_2 .
- The parametric equations of the line that passes through the point $(2, -1, 3)$ and perpendicular to the plane π_2 .

SOLUTION

a) $L: \frac{x-1}{2} = \frac{y-3}{-1} = \frac{z-2}{-3}$ (1)

$\pi_1: 2x - y - 2z = 17$ (2)

From (1), the parametric equation of L :

$$x = 1 + 2t; \quad y = 3 - t \quad z = 2 - 3t \quad \text{..... (3)}$$

Substitute (3) into (2)

$$2(1 + 2t) - (3 - t) - 2(2 - 3t) = 17$$

$$2 + 4t - 3 + t - 4 + 6t = 17$$

$$11t = 22$$

$$t = 2 \quad \text{..... (4)}$$

Substitute (4) into (3)

$$x = 1 + 2(2); \quad y = 3 - 2 \quad z = 2 - 3(2)$$

$$x = 5 \quad y = 1 \quad z = -4$$

The intersection point between L and π_1 is $(5, 1, -4)$

$$\text{b) } \pi_1: 2x - y - 2z = 17 \quad \rightarrow \quad \mathbf{n}_1 = 2\mathbf{i} - \mathbf{j} - 2\mathbf{k}$$

$$\pi_2: -4x - 3y + 5z = 10 \quad \rightarrow \quad \mathbf{n}_2 = -4\mathbf{i} - 3\mathbf{j} + 5\mathbf{k}$$

$$\cos \theta = \frac{\mathbf{n}_1 \cdot \mathbf{n}_2}{|\mathbf{n}_1| |\mathbf{n}_2|}$$

$$\begin{aligned} \mathbf{n}_1 \cdot \mathbf{n}_2 &= (2\mathbf{i} - \mathbf{j} - 2\mathbf{k}) \cdot (-4\mathbf{i} - 3\mathbf{j} + 5\mathbf{k}) \\ &= (2)(-4) + (-1)(-3) + (-2)(5) \\ &= -8 + 3 - 10 \\ &= -15 \end{aligned}$$

$$\begin{aligned} |\mathbf{n}_1| &= \sqrt{(2)^2 + (-1)^2 + (-2)^2} \\ &= 3 \end{aligned}$$

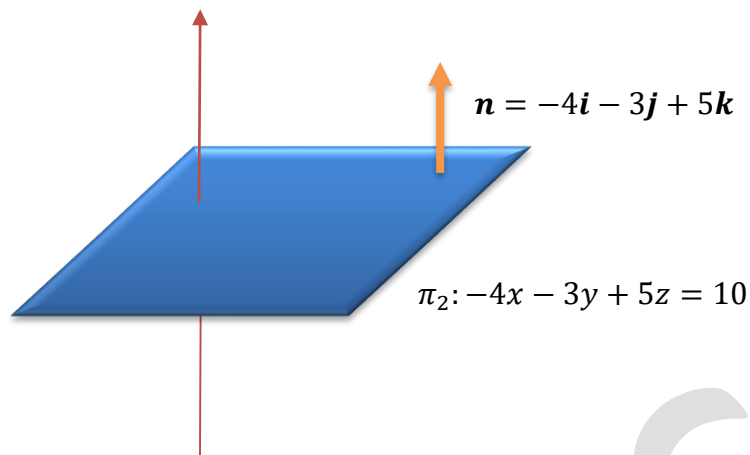
$$\begin{aligned} |\mathbf{n}_2| &= \sqrt{(-4)^2 + (-3)^2 + (5)^2} \\ &= \sqrt{50} \end{aligned}$$

$$\begin{aligned} \cos \theta &= \frac{\mathbf{n}_1 \cdot \mathbf{n}_2}{|\mathbf{n}_1| |\mathbf{n}_2|} \\ &= \frac{-15}{3\sqrt{50}} \\ &= -0.7071 \end{aligned}$$

$$\begin{aligned} \theta &= \cos^{-1}(-0.7071) \\ &= 135^\circ \end{aligned}$$

$$\therefore \theta = 180^\circ - 135^\circ = 45^\circ$$

c)



Parametric equations of line:

$$x = x_1 + ta$$

$$y = y_1 + tb$$

$$z = z_1 + tc$$

$$v = n = -4i - 3j + 5k \quad \rightarrow \quad a = -4; \quad b = -3; \quad c = 5$$

$$a = 2i - 1j + 3k \quad \rightarrow \quad x_1 = 2; \quad y_1 = -1; \quad z_1 = 3$$

$$\therefore x = 2 - 4t \quad y = -1 - 3t \quad z = 3 + 5t$$

8. Express $\frac{6x^2-x+7}{(4-3x)(1+x)^2}$ in partial fractions. Hence, show that $\int_0^1 \frac{6x^2-x+7}{(4-3x)(1+x)^2} dx = 1 + \ln 2$.

SOLUTION

$$\frac{6x^2 - x + 7}{(4 - 3x)(1 + x)^2} = \frac{A}{(4 - 3x)} + \frac{B}{(1 + x)} + \frac{C}{(1 + x)^2}$$

$$\frac{6x^2 - x + 7}{(4 - 3x)(1 + x)^2} = \frac{A(1 + x)^2 + B(4 - 3x)(1 + x) + C(4 - 3x)}{(4 - 3x)(1 + x)^2}$$

$$6x^2 - x + 7 = A(1 + x)^2 + B(4 - 3x)(1 + x) + C(4 - 3x)$$

When $x = -1$

$$6x^2 - x + 7 = A(1 + x)^2 + B(4 - 3x)(1 + x) + C(4 - 3x)$$

$$6(-1)^2 - (-1) + 7 = A(1 + (-1))^2 + B(4 - 3(-1))(1 + (-1)) + C(4 - 3(-1))$$

$$6 + 1 + 7 = A(0)^2 + B(4 - 3(-1))(0) + C(4 + 3)$$

$$14 = 7C$$

$$C = 2$$

When $x = \frac{4}{3}$

$$6x^2 - x + 7 = A(1 + x)^2 + B(4 - 3x)(1 + x) + C(4 - 3x)$$

$$6\left(\frac{4}{3}\right)^2 - \left(\frac{4}{3}\right) + 7 = A\left[1 + \left(\frac{4}{3}\right)\right]^2 + B\left[4 - 3\left(\frac{4}{3}\right)\right]\left[1 + \left(\frac{4}{3}\right)\right] + C\left[4 - 3\left(\frac{4}{3}\right)\right]$$

$$6\left(\frac{16}{9}\right) - \left(\frac{4}{3}\right) + 7 = A\left[\frac{7}{3}\right]^2 + B[0]\left[1 + \left(\frac{4}{3}\right)\right] + C[0]$$

$$\frac{32}{3} - \left(\frac{4}{3}\right) + \frac{21}{3} = \frac{49}{9}A$$

$$\frac{49}{3} = \frac{49}{9}A$$

$$A = \left(\frac{49}{3}\right)\left(\frac{9}{49}\right)$$

$$= 3$$

Let $A = 3, C = 2, x = 0$

$$6x^2 - x + 7 = A(1+x)^2 + B(4-3x)(1+x) + C(4-3x)$$

$$7 = 3(1)^2 + B(4)(1) + 2(4)$$

$$7 = 3 + 4B + 8$$

$$4B = -4$$

$$B = -1$$

$$\frac{6x^2 - x + 7}{(4-3x)(1+x)^2} = \frac{3}{(4-3x)} - \frac{1}{(1+x)} + \frac{2}{(1+x)^2}$$

$$\begin{aligned}\int \frac{6x^2 - x + 7}{(4-3x)(1+x)^2} dx &= \int \frac{3}{(4-3x)} - \frac{1}{(1+x)} + \frac{2}{(1+x)^2} dx \\ &= \int \frac{3}{(4-3x)} dx - \int \frac{1}{(1+x)} dx + \int \frac{2}{(1+x)^2} dx \\ &= -\int \frac{-3}{(4-3x)} dx - \int \frac{1}{(1+x)} dx + \int 2(1+x)^{-2} dx \\ &= -\ln(4-3x) - \ln(1+x) - \frac{2}{1+x}\end{aligned}$$

$$\begin{aligned}\int_0^1 \frac{6x^2 - x + 7}{(4 - 3x)(1 + x)^2} dx &= \left[-\ln(4 - 3x) - \ln(1 + x) - \frac{2}{1 + x} \right]_0^1 \\ &= \left[-\ln(4 - 3(1)) - \ln(1 + (1)) - \frac{2}{1 + 1} \right] - \left[-\ln(4 - 3(0)) - \ln(1 + (0)) - \frac{2}{1 + (0)} \right] \\ &= \left[-\ln(1) - \ln(2) - \frac{2}{2} \right] - \left[-\ln(4) - \ln(1) - \frac{2}{1} \right] \\ &= [0 - \ln 2 - 1] - [-\ln(4) - 0 - 2] \\ &= 0 - \ln 2 - 1 + \ln 4 + 2 \\ &= -\ln 2 - 1 + \ln 2^2 + 2 \\ &= -\ln 2 + 2\ln 2 + 1 \\ &= 1 + \ln 2\end{aligned}$$

9. a) Find the general solution of the differential equation $\frac{dy}{dx} = y^2 x e^{-2x}$. Give your answer in the form $y = f(x)$.

b) Find the particular solution of the differential equation $\frac{dy}{dx} + \frac{xy}{1+x^2} = \sqrt{1+x^2}$, given that $y = 1$ when $x = 0$.

solution

a) $\frac{dy}{dx} = y^2 x e^{-2x}$

$$\frac{dy}{y^2} = x e^{-2x} dx$$

$$\int \frac{1}{y^2} dy = \int x e^{-2x} dx$$

$$\int y^{-2} dy = \int x e^{-2x} dx$$

$$-\frac{1}{y} = uv - \int v du$$

$$-\frac{1}{y} = (x) \left(\frac{e^{-2x}}{-2} \right) - \int \frac{e^{-2x}}{-2} dx$$

$$-\frac{1}{y} = \frac{x e^{-2x}}{-2} + \frac{1}{2} \int e^{-2x} dx$$

$$-\frac{1}{y} = \frac{x e^{-2x}}{-2} + \frac{1}{2} \left[\frac{e^{-2x}}{-2} \right] + c$$

$$-\frac{1}{y} = \frac{x e^{-2x}}{-2} - \frac{e^{-2x}}{4} + c$$

$$\frac{1}{y} = \frac{x e^{-2x}}{2} + \frac{e^{-2x}}{4} - c$$

Integration by part

$$u = x$$

$$\frac{du}{dx} = 1$$

$$du = dx$$

$$dv = \int e^{-2x} dx$$

$$v = \frac{e^{-2x}}{-2}$$

$$\frac{1}{y} = \frac{2xe^{-2x}}{4} + \frac{e^{-2x}}{4} - \frac{4c}{4}$$

$$\frac{1}{y} = \frac{2xe^{-2x} + e^{-2x} - 4c}{4}$$

$$y = \frac{4}{2xe^{-2x} + e^{-2x} - 4c}$$

b) $\frac{dy}{dx} + \frac{xy}{1+x^2} = \sqrt{1+x^2}$

$$\frac{dy}{dx} + \left(\frac{x}{1+x^2}\right)y = \sqrt{1+x^2}$$

$$\frac{dy}{dx} + P(x).y = Q(x)$$

$$P(x) = \left(\frac{x}{1+x^2}\right) \quad Q(x) = \sqrt{1+x^2}$$

$$V(x) = e^{\int P(x)dx}$$

$$= e^{\int \frac{x}{1+x^2} dx}$$

$$= e^{\frac{1}{2} \int \frac{2x}{1+x^2} dx}$$

$$= e^{\frac{1}{2} \ln(1+x^2)}$$

$$= e^{\ln(1+x^2)^{\frac{1}{2}}}$$

$$= (1+x^2)^{\frac{1}{2}}$$

$$a^{\log_a x} = x$$

$$V(x).y = \int V(x)Q(x) dx$$

$$(1+x^2)^{\frac{1}{2}}.y = \int (1+x^2)^{\frac{1}{2}}. \sqrt{1+x^2} dx$$

$$(1+x^2)^{\frac{1}{2}}.y = \int 1+x^2 dx$$

$$(1 + x^2)^{\frac{1}{2}} \cdot y = x + \frac{x^3}{3} + C$$

When $x = 0, y = 1$

$$(1 + 0^2)^{\frac{1}{2}} \cdot (1) = 0 + \frac{0^3}{3} + C$$

$$C = 1$$

$$\therefore \text{The particular solution: } y\sqrt{1 + x^2} = x + \frac{x^3}{3} + 1$$

10. Given the curve $y^2 = x$ and the line $y = -2x + 1$.
- Determine the points of intersection between the curve and the line.
 - Sketch the curve and the line on the same axes. Shade the region R bounded by the curve and the line. Label the points of intersection.
 - Find the area of the region R .
 - Calculate the volume of the solid generated when the region R is rotated 2π radian about the y -axis.

SOLUTION

- a) $y^2 = x$ and the line $y = -2x + 1$.

$$y^2 = x \quad \dots\dots\dots (1)$$

$$y = -2x + 1 \quad \dots\dots\dots (2)$$

Substitute (1) into (2)

$$y = -2y^2 + 1$$

$$2y^2 + y - 1 = 0$$

$$(2y - 1)(y + 1) = 0$$

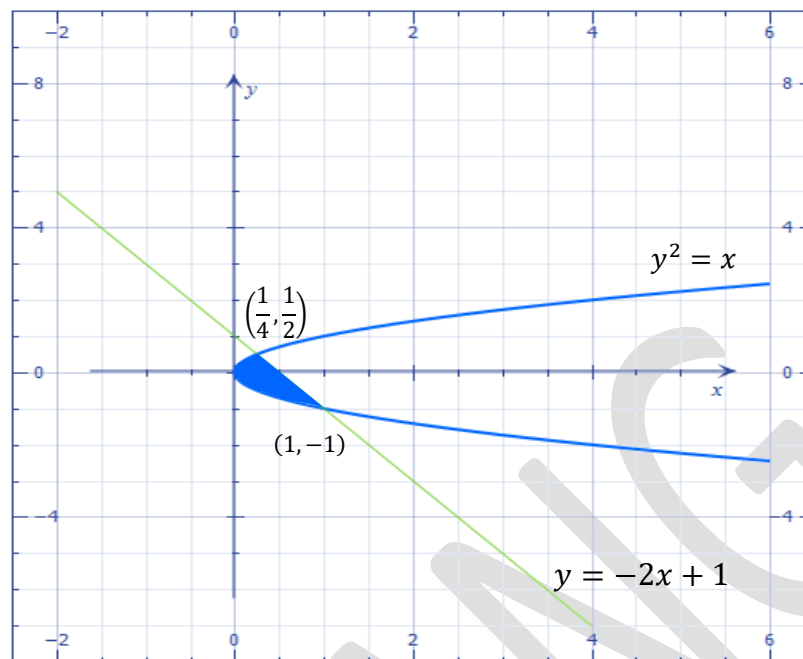
$$y = \frac{1}{2} \quad \text{or} \quad y = -1$$

$$x = y^2$$

$$x = \frac{1}{4} \quad x = 1$$

\therefore The intersection points: $(1, -1), \left(\frac{1}{4}, \frac{1}{2}\right)$

(b)



$$\begin{aligned}
 \text{(c) Area} &= \int_{-1}^{\frac{1}{2}} \left(\frac{y-1}{-2} - (y^2) \right) dy \\
 &= \int_{-1}^{\frac{1}{2}} \left(\frac{y-1+2y^2}{-2} \right) dy \\
 &= \frac{1}{-2} \int_{-1}^{\frac{1}{2}} 2y^2 + y - 1 \, dy \\
 &= \frac{1}{-2} \left[\frac{2y^3}{3} + \frac{y^2}{2} - y \right]_{-1}^{\frac{1}{2}} \\
 &= \frac{1}{-2} \left\{ \left[2 \left(\frac{1}{2} \right)^3 + \frac{\left(\frac{1}{2} \right)^2}{2} - \left(\frac{1}{2} \right) \right] - \left[\frac{2(-1)^3}{3} + \frac{(-1)^2}{2} - (-1) \right] \right\} \\
 &= \frac{1}{-2} \left\{ \left[\frac{1}{12} + \frac{1}{8} - \frac{1}{2} \right] - \left[\frac{-2}{3} + \frac{1}{2} + 1 \right] \right\}
 \end{aligned}$$

$$\begin{aligned}
&= \frac{1}{-2} \left\{ \left[\frac{2+3-12}{24} \right] - \left[\frac{-4}{6} + \frac{3}{6} + \frac{6}{6} \right] \right\} \\
&= \frac{1}{-2} \left(\frac{-7}{24} - \frac{5}{6} \right) \\
&= \frac{1}{-2} \left(\frac{-7}{24} - \frac{20}{24} \right) \\
&= \frac{1}{-2} \left(\frac{-27}{24} \right) \\
&= \frac{1}{-2} \left(\frac{-9}{8} \right) \\
&= \frac{9}{16} \text{ unit}^2
\end{aligned}$$

(d) $Volume = \pi \int_{-1}^{\frac{1}{2}} \left(\frac{y-1}{-2} \right)^2 - (y^2)^2 dy$

$$\begin{aligned}
&= \pi \int_{-1}^{\frac{1}{2}} \frac{y^2 - 2y + 1}{4} - y^4 dy \\
&= \pi \int_{-1}^{\frac{1}{2}} \frac{y^2 - 2y + 1 - 4y^4}{4} dy \\
&= \frac{\pi}{4} \int_{-1}^{\frac{1}{2}} -4y^4 + y^2 - 2y + 1 dy \\
&= \frac{\pi}{4} \left[\frac{-4y^5}{5} + \frac{y^3}{3} - \frac{2y^2}{2} + y \right]_{-1}^{\frac{1}{2}} \\
&= \frac{\pi}{4} \left[\frac{-4y^5}{5} + \frac{y^3}{3} - y^2 + y \right]_{-1}^{\frac{1}{2}} \\
&= \frac{\pi}{4} \left\{ \left(\frac{-4\left(\frac{1}{2}\right)^5}{5} + \frac{\left(\frac{1}{2}\right)^3}{3} - \left(\frac{1}{2}\right)^2 + \left(\frac{1}{2}\right) \right) - \left(\frac{-4(-1)^5}{5} + \frac{(-1)^3}{3} - (-1)^2 + (-1) \right) \right\}
\end{aligned}$$

$$\begin{aligned} &= \frac{\pi}{4} \left\{ \left(\frac{-1}{40} + \frac{1}{24} - \frac{1}{4} + \frac{1}{2} \right) - \left(\frac{4}{5} - \frac{1}{3} - 1 - 1 \right) \right\} \\ &= \frac{\pi}{4} \left\{ \left(\frac{-24 + 40 - 240 + 480}{960} \right) - \left(\frac{12 - 5 - 15 - 15}{15} \right) \right\} \\ &= \frac{\pi}{4} \left\{ \left(\frac{256}{960} \right) + \left(\frac{23}{15} \right) \right\} \\ &= \frac{\pi}{4} \left(\frac{256 + 1472}{960} \right) \\ &= \frac{\pi}{4} \left(\frac{1728}{960} \right) \\ &= \frac{9}{20} \pi \text{ unit}^3 \end{aligned}$$